

This week we have been looking at fractions finding halves. Please support your child to complete the task below and return by next Wednesday 10th December.


Thank you for your support, Mrs Harness, Mrs Liu and Mrs Green.

1)



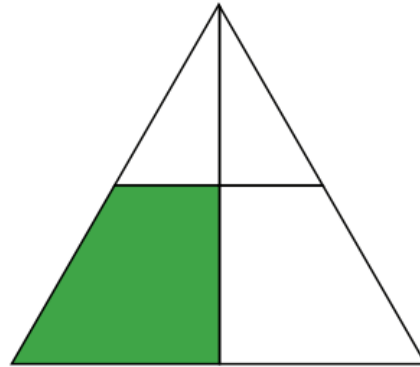
Inaya

There are 2 parts, so the shape shows a half.



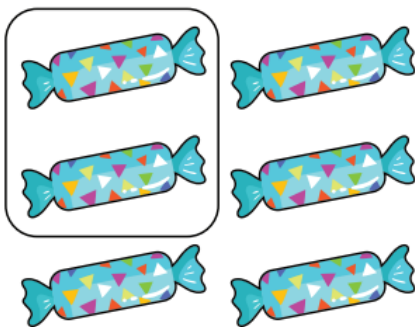
Do you agree with Inaya? Explain why.

2) Colour one more part to show half of the triangle.



Explain your reasoning.

3) James circles the picture below to show a half.



a) What mistake has James made?

b) Correct his mistake.

4)



Shen

There are only 2 ways of showing a half with a square.

Do you agree with Shen? Prove it!

