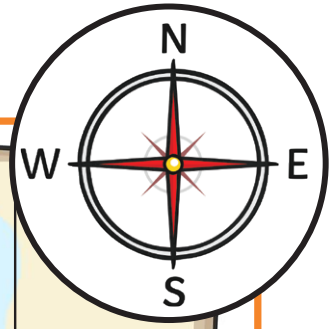


Pirate Map Compass Points



Can you follow the compass directions below and answer the questions?



From the start, go north 1 square.
Where are you now?

From the start, go west 2 squares.
Where are you now?

From the mermaid, go east 3 squares. Where are you now?

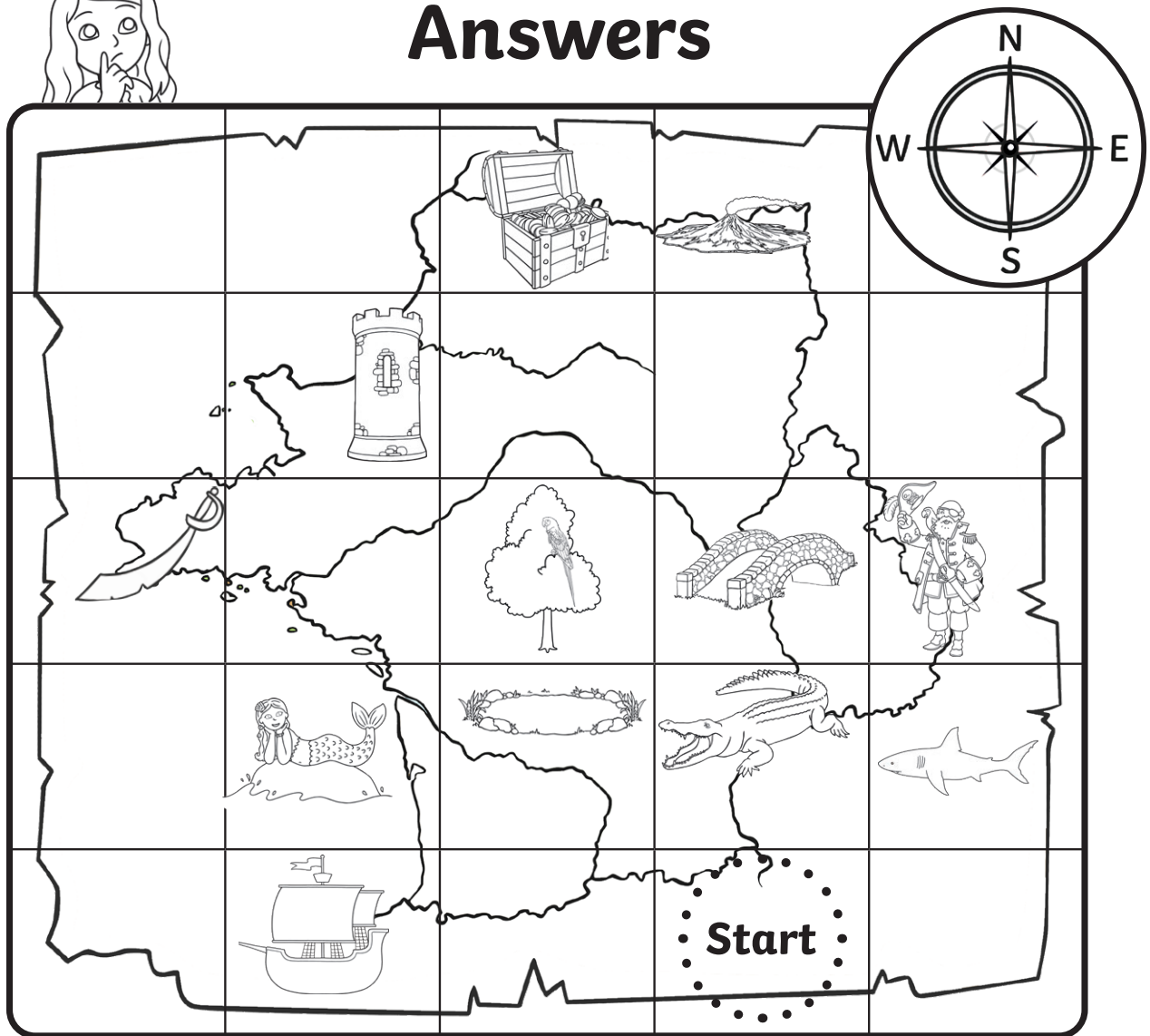
From the volcano, go south 2 squares. Where are you now?

Start at the pond. How do you get to the treasure?

Pirate Map Compass Points



Answers

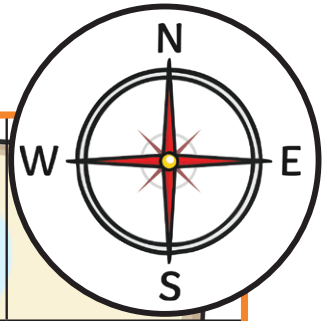


From the start, go north 1 square. Where are you now?	crocodile
From the start, go west 2 squares. Where are you now?	pirate ship
From the mermaid, go east 3 squares. Where are you now?	shark
From the volcano, go south 2 squares. Where are you now?	bridge
Start at the pond. How do you get to the treasure?	Go north 3 squares

Pirate Map Compass Points



Can you follow the compass directions below and answer the questions?



From the start, go west 2 squares and north 3 squares. Where are you now?

From the start, go east 1 square and north 2 squares. Where are you now?

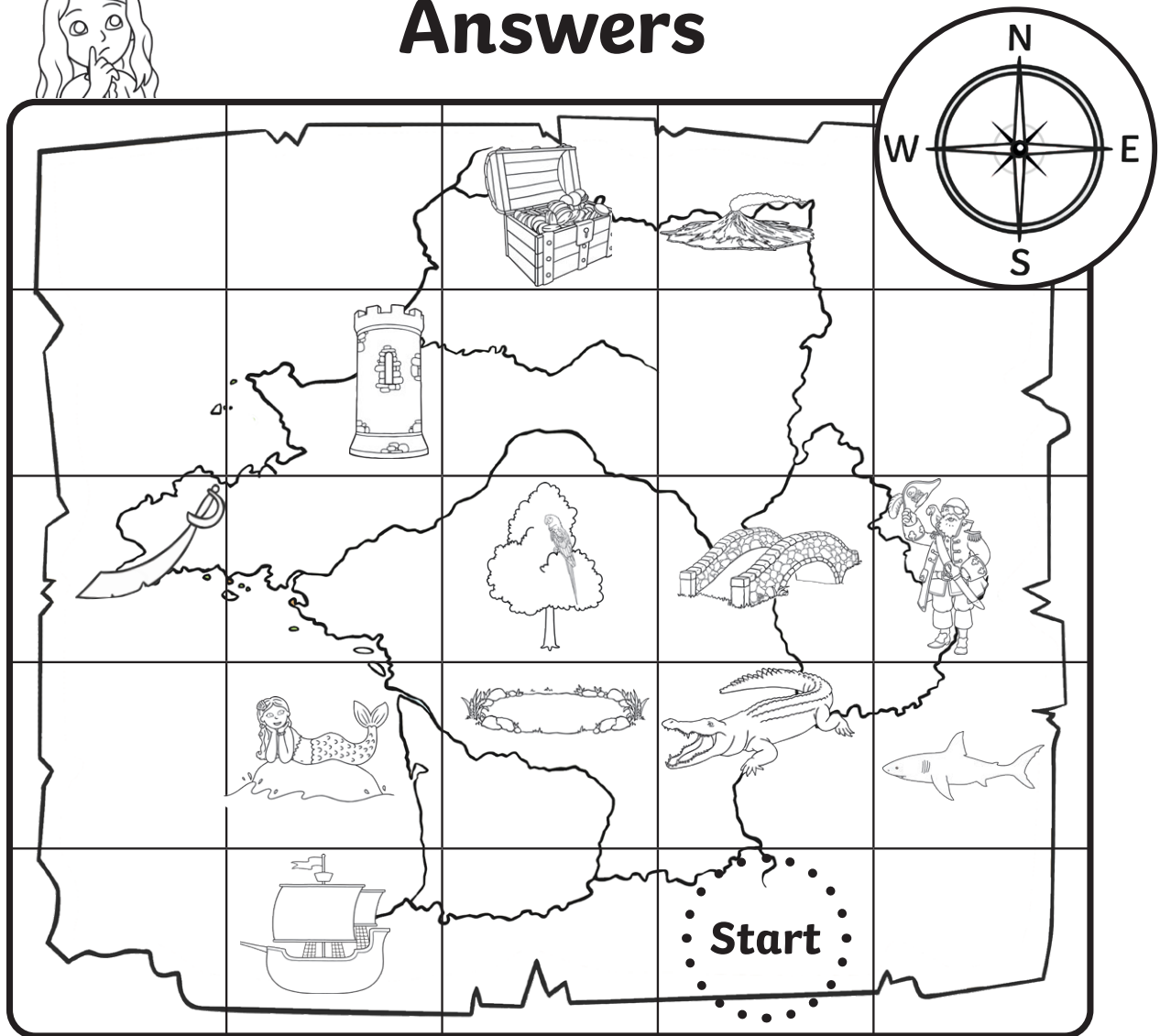

From the volcano, go south 2 squares and west 3 squares. Where are you now?

From the tower, go south 2 squares and east 3 squares. Where are you now?

Using only the directions north, south, east or west, how could you get from the pirate ship to the treasure?

Pirate Map Compass Points

Answers

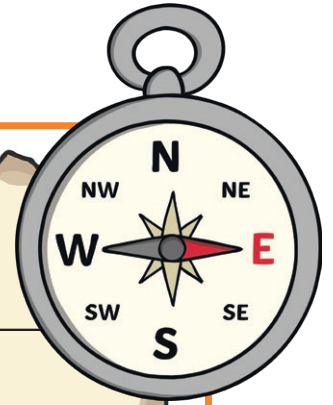


From the start, go west 2 squares and north 3 squares. Where are you now?	tower
From the start, go east 1 square and north 2 squares. Where are you now?	pirate
From the volcano, go south 2 squares and west 3 squares. Where are you now?	sword
From the tower, go south 2 squares and east 3 squares. Where are you now?	shark
Using only the directions north, south, east or west, how could you get from the pirate ship to the treasure?	Go east 1 square and north 4 squares. Go north 4 squares and east 1 square.

Pirate Map Compass Points



Can you follow the compass directions below and answer the questions?



From the start, go north 2 squares and west 1 square. Which animal can you see?

Start at the volcano. Travel south 2 squares and south-east 1 square. What can you see?

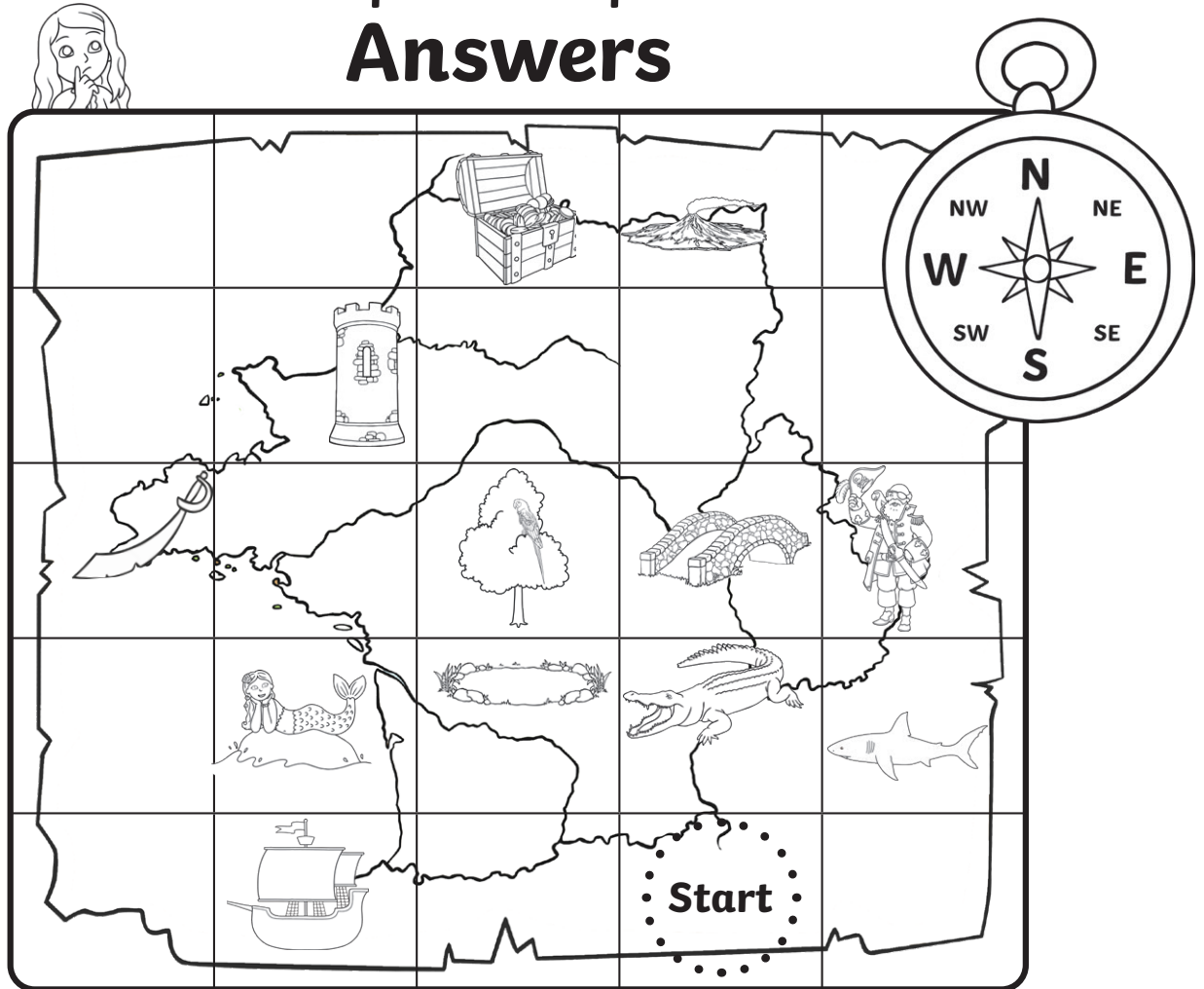
Start at the pirate. Travel west 2 squares and north-west 1 square. What can you see?

From the pond, travel north 2 squares and north-east 1 square. What can you see?

Name three different ways that the pirate could get to the treasure.

Pirate Map Compass Points

Answers



From the start, go north 2 squares and west 1 square. Which animal can you see?	parrot
Start at the volcano. Travel south 2 squares and south-east 1 square. What can you see?	shark
Start at the pirate. Travel west 2 squares and north-west 1 square. What can you see?	tower
From the pond, travel north 2 squares and north-east 1 square. What can you see?	volcano
Name three different ways that the pirate could get to the treasure.	Go north 2 squares and west 2 squares. Go west 2 squares and north 2 squares. Go north-west 2 squares.