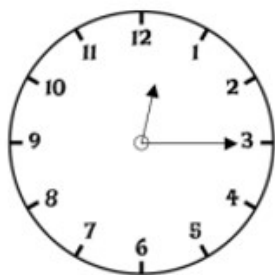


Time

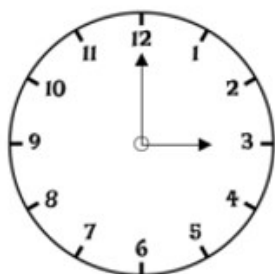
A

Name _____

- 1 Match the analogue and digital clocks which show the same time.



15:00



12:15



03:12



2 marks

- 2 Complete the table.

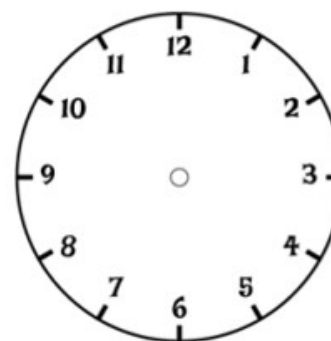
Month	Number of days
March	
November	
	28 or 29



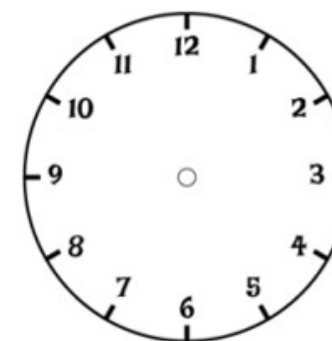
3 marks

- 3 Jack sets off to the shop at twenty past nine. He arrives at the shop 35 minutes later.

Draw the times he sets off and arrives on the clock faces.



Sets off



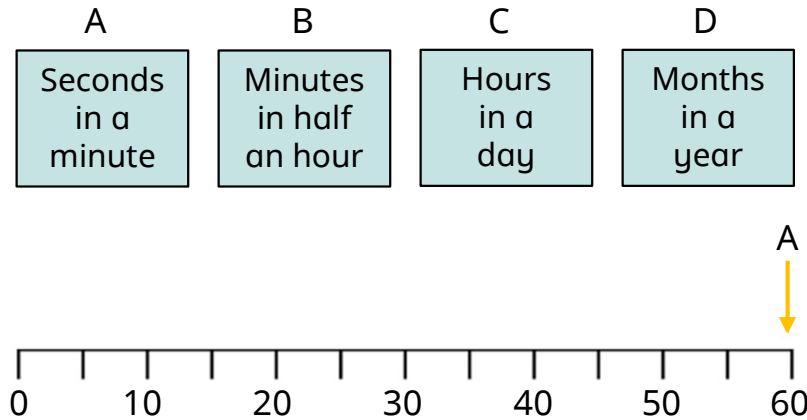
Arrives



2 marks

- 4 Draw arrows to match each box to the correct position on the number line.

One has been done for you.



- 5 Tick all the times that match the time shown on the digital clock.

17:45

quarter to 6 in the evening

5:45 am

5:45 pm

7:45 pm

- 6 A machine makes one gadget every 20 seconds.
How many gadgets does it make in 5 minutes?



1 mark

- 7 Ron and Amir both walk 12 kilometres.

Ron takes 4 hours and 10 minutes.

Amir takes 270 minutes.

Who takes the longest time?



1 mark

How much longer do they take?



1 mark



2 marks