



This week we have been focusing on fractions. Please support your child in completing the task below. Please return by Wednesday 17th December.
Thank you for your support, Mrs Harness, Mrs Liu and Mrs Green.

I can write simple fractions.

Starter	Reasoning
<p data-bbox="292 584 667 611">Shade a quarter of the two shapes</p> <div data-bbox="217 678 762 931">  </div>	<p data-bbox="903 600 1201 627">Molly is thinking of a number.</p> <p data-bbox="903 649 1267 701">One quarter of her number is shown below.</p> <div data-bbox="991 703 1246 831">  </div> <p data-bbox="903 851 1147 878">What is Molly's number?</p> <div data-bbox="807 913 1410 981"> <hr/> <hr/> </div>

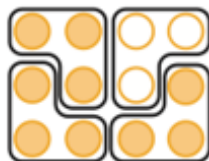
Write the following in your book.

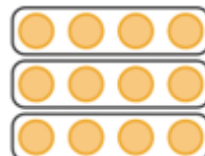
The whole is _____.

Three quarters of _____ is _____.



Tick the pictures which shows $\frac{3}{4}$.


☐

☐

☐

☐

☐