

English:

This week in English we have written our own instructions for how to wash your hands. Can you use these pictures to help you write some instructions for how to brush your teeth?

1.



2.



3.

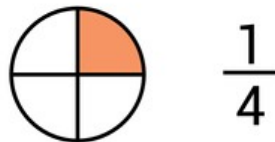


4.



Maths:

This week in maths we have been learning about quarters. You will find your activity on the next page.



Phonics - Sounds of the week:

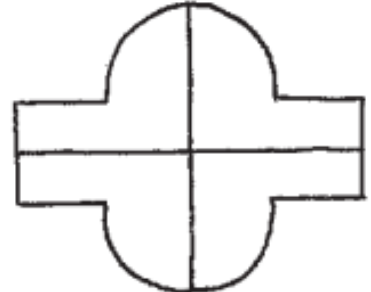
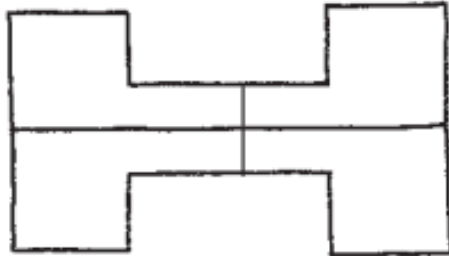
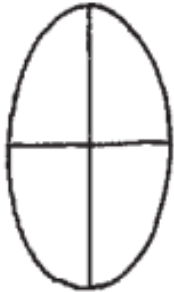
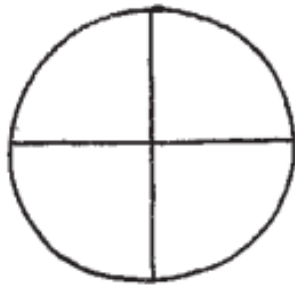

ow



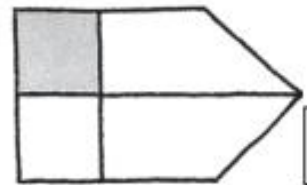
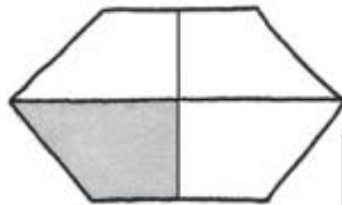
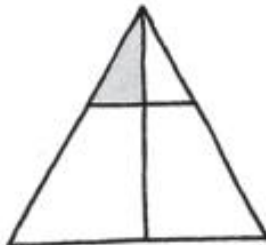
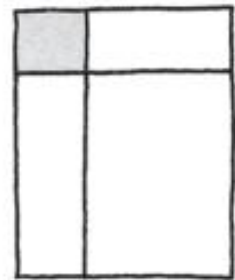
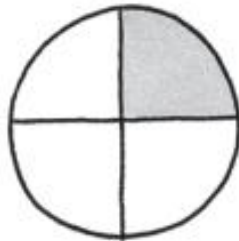

ai



Color one quarter ($\frac{1}{4}$) of each shape.



Write a \checkmark in the box if $\frac{1}{4}$ of the figure is shaded and a \times if less than $\frac{1}{4}$ is shaded.



Color one quarter ($\frac{1}{4}$) of each picture.

