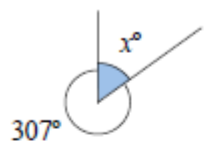
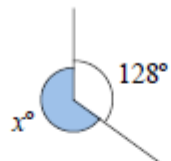


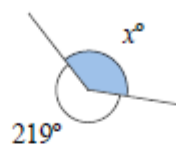
A1 Find the value x



A2 Find the value x



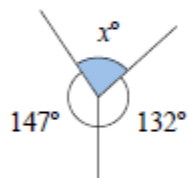
A3 Find the value x



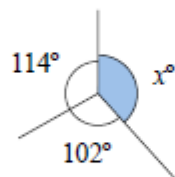
A4 Find the value x



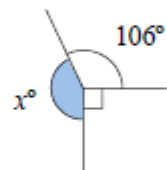
B1 Find the value x



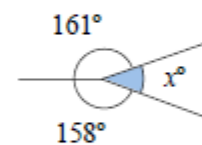
B2 Find the value x



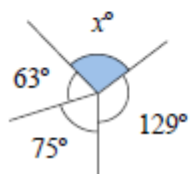
B3 Find the value x



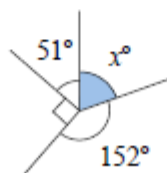
B4 Find the value x



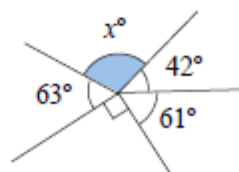
C1 Find the value of x



C2 Find the value of x



C3 Find the value of x



C4 Find the value of x

